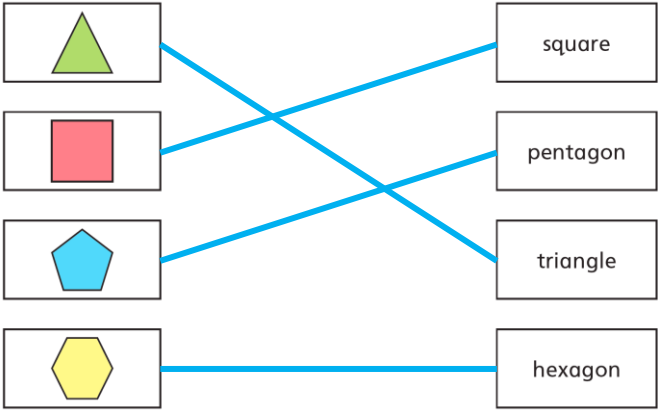
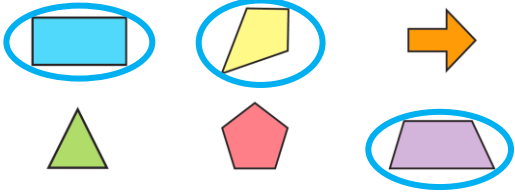
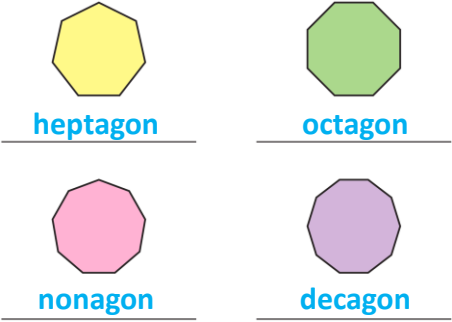
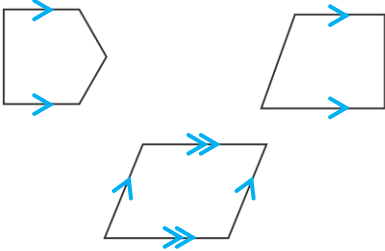


Y3 – Summer – Block 4 – Step 7 – Recognise and describe 2-D shapes Answers

Question	Answer
1	
2	<p>a) circle b) pentagon c) triangle d) hexagon</p>
3	<p>a) A triangle has three straight sides. One of the sides of this shape is curved. b) The shape looks like the outline of a house. pentagon</p>
4	<p>a)</p> 
5	<p>a) drawing of three shapes with four straight sides b) <u>yes</u> no</p>
6	<p>It is a closed shape with six straight sides.</p>
7	 <p>Count the number of sides.</p>

Y3 – Summer – Block 4 – Step 7 – Recognise and describe 2-D shapes Answers (conintued)

Question	Answer
8	 <p>The answer section contains three 2-D shapes, each with blue arrows on its sides indicating a direction. The first shape is a pentagon with arrows on the top and bottom horizontal sides pointing to the right. The second shape is a trapezium with arrows on the top and bottom horizontal sides pointing to the right. The third shape is a parallelogram with arrows on all four sides pointing in a clockwise direction.</p>